

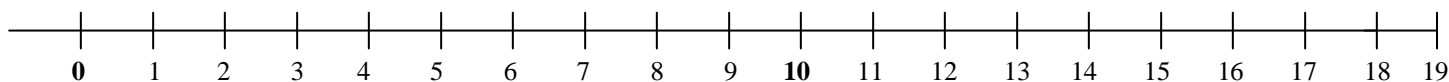
Name: _____

CCSS 2.OA.2 Fluently add and subtract within 20 using mental strategies,.....

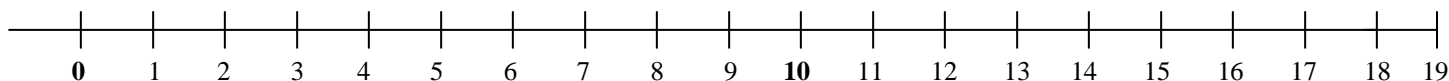
Count Back to Subtract

Directions: Use the number line below to count back to subtract. Show your work on the number line.

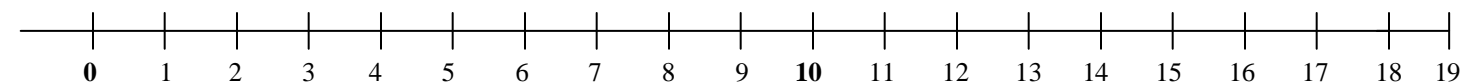
1) $8 - 2 = \underline{\quad}$



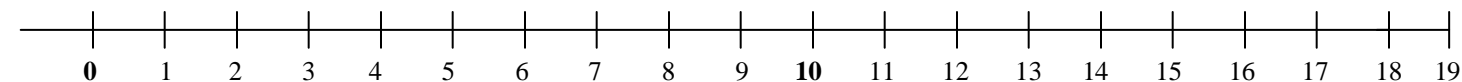
2) $16 - 8 = \underline{\quad}$



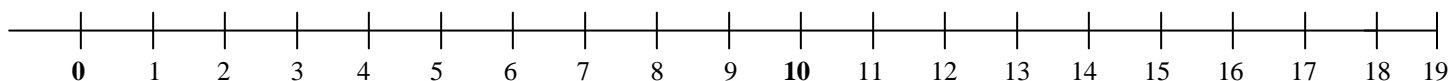
3) $14 - 5 = \underline{\quad}$



4) $19 - 11 = \underline{\quad}$



5) $15 - 5 = \underline{\quad}$



_____ I double checked my work.