

Name: _____

Partition Shapes

~~6~~ Directions: Partition the shapes below as instructed. Number the partitions.

1. Partition the rectangle into two equal shares in two different ways.



2. Partition the rectangle into three equal shares in two different ways.



- 3 Partition the rectangle into four equal shares in two different ways.


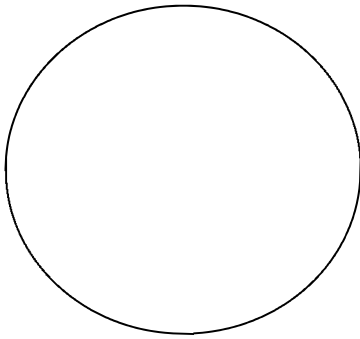


Name: _____


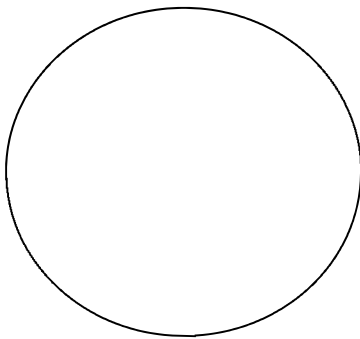
Partition Shapes

~~6~~ Directions: Partition the shapes below as instructed. Number the partitions.

1. Partition the circle into two equal shares in two different ways.



2. Partition the circle into three equal shares in two different ways.



3 Partition the circle into four equal shares in two different ways.

