



Name: _____


CCSS 2.NBT.5 Fluently add and subtract within 100.....


2-Digit Subtraction


~~6d~~ Directions: Find the difference.



$$\begin{array}{r} 35 \\ - 28 \\ \hline \end{array}$$


$$\begin{array}{r} 43 \\ - 42 \\ \hline \end{array}$$


$$\begin{array}{r} 54 \\ - 29 \\ \hline \end{array}$$


$$\begin{array}{r} 36 \\ - 14 \\ \hline \end{array}$$


$$\begin{array}{r} 68 \\ - 27 \\ \hline \end{array}$$


$$\begin{array}{r} 73 \\ - 24 \\ \hline \end{array}$$

THANKSGIVING