



Name: _____


CCSS 2.NBT.5 Fluently add and subtract within 100.....


2-Digit Addition


~~6~~ Directions: Find the sums.



$$\begin{array}{r} 35 \\ + 28 \\ \hline \end{array}$$


$$\begin{array}{r} 43 \\ + 42 \\ \hline \end{array}$$


$$\begin{array}{r} 29 \\ + 54 \\ \hline \end{array}$$


$$\begin{array}{r} 14 \\ + 36 \\ \hline \end{array}$$


$$\begin{array}{r} 68 \\ + 27 \\ \hline \end{array}$$


$$\begin{array}{r} 73 \\ + 24 \\ \hline \end{array}$$

THANKSGIVING