

Name: _____

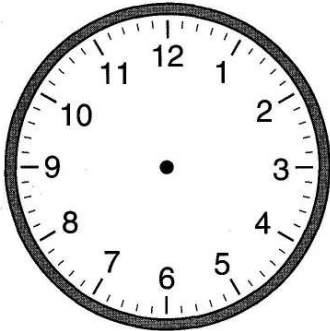
CCSS 3.MD.1 Tell and write time to the nearest minute and measure time.....

Elapsed Time


Directions: Solve the following elapsed time problems.

Mrs. Starkey was sent to time-out at 3:00 PM. Her time-out ended at 6:00 AM. How long was Mrs. Starkey in time-out?

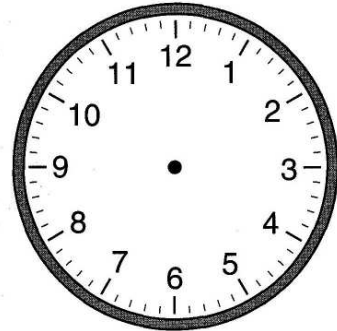
Time-out started



□ : □



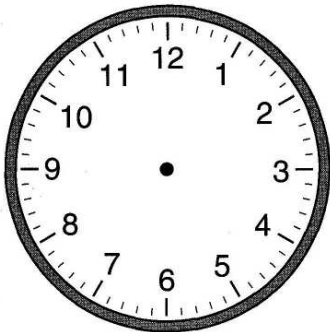
Time-out ended



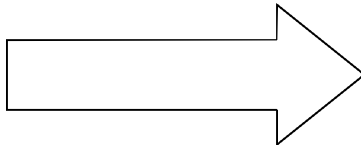
□ : □

It started raining at 9:00 AM. The sun came out and it stopped raining at 1:00 PM. How long did it rain?

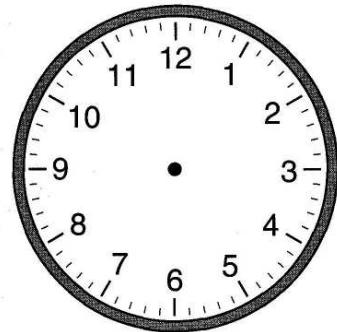
Time Movie Started



□ : □



Time Movie Ended



□ : □

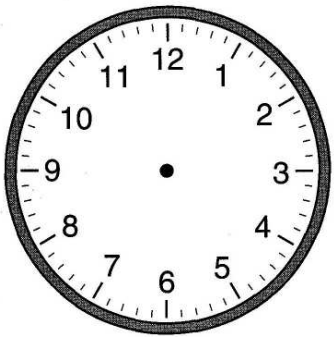
Name: _____

Elapsed Time

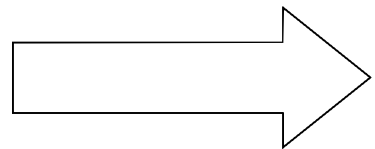
Solve the following elapsed time problems.

Katie's plane left the airport in Atlanta at 7:00 AM. Her plane landed in Hollywood at 11:30 AM. How long was her flight?

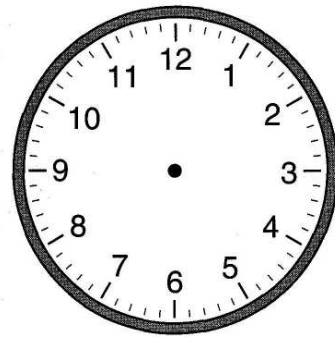
Time party started



_____ : _____



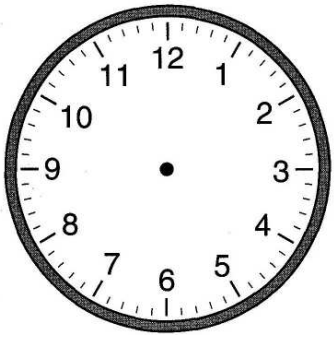
Time party ended



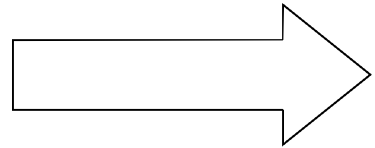
_____ : _____

Gabriel's mom put the turkey in the oven at 6:30 AM. She took the turkey out of the oven at 2:00 PM. How long did the turkey cook?

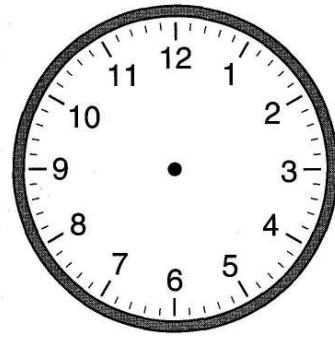
Time concert started



_____ : _____



Time concert ended



_____ : _____
