

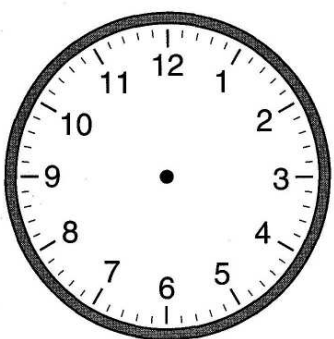
Name: \_\_\_\_\_

# Elapsed Time

**Directions:** Solve the following elapsed time problems.

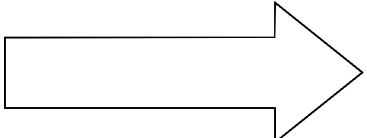
Nate's game started at 2:00. It lasted for 3 hours. What time did his game end? Draw the time the game started and the time it ended. Write the digital time.

Time Game Started

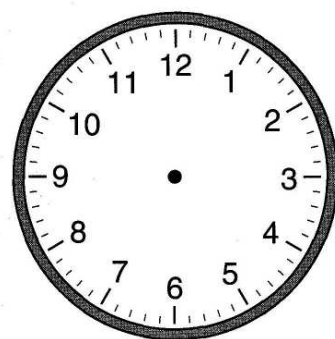


:

+ 3 hours



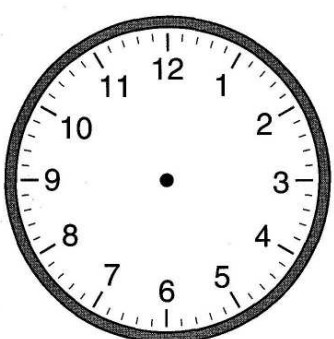
Time Game Ended



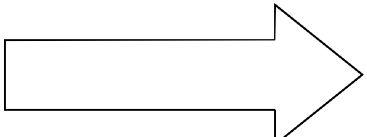
:

The movie Seth went to see started at 5:00. It lasted for 2 hours and 30 minutes. What time was the movie over?

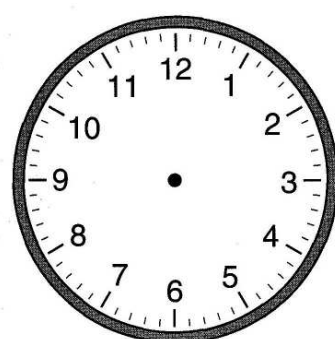
Time Movie Started



:



Time Movie Ended



:

Name: \_\_\_\_\_

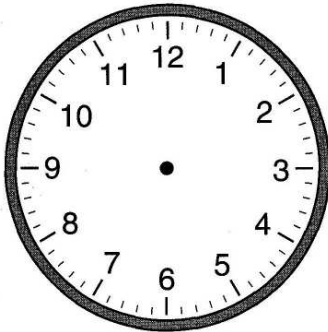
CCSS 3.MD.1 Tell and write time to the nearest minute and measure time.....

## Elapsed Time

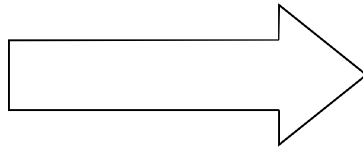
**6d** Solve the following elapsed time problems.

Kyla's birthday party started at 1:30. It lasted for 2 hours. What time did the party end?

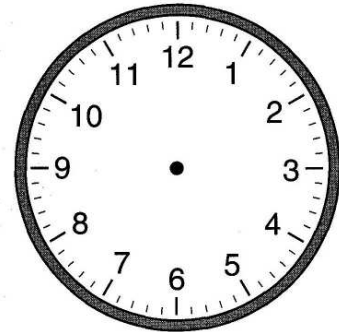
Time party started



:  
:



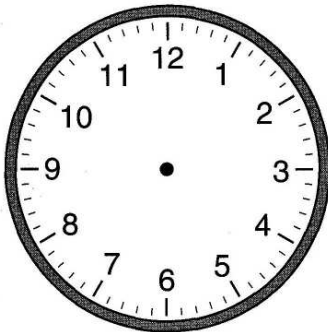
Time party ended



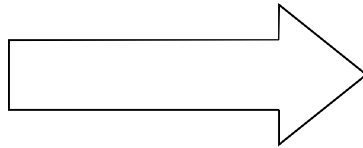
:  
:

Mrs. Starkey went to see Mr. Kelley in concert. The concert started at 9:00. It lasted for 5 hours. What time did the concert end?

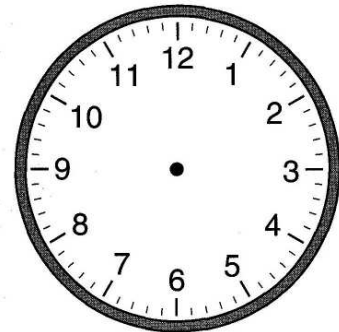
Time concert started



:  
:



Time concert ended



:  
: