













Name: _____

Place Value

 Directions: Write the value of the underlined digit.

 <u>6</u> 54 _____	 24 <u>9</u> _____	 <u>7</u> 5 _____	 7 <u>5</u> 6 _____
 54 <u>6</u> _____	 <u>4</u> 51 _____	 2 <u>3</u> _____	 <u>6</u> 24 _____
 8 <u>1</u> 2 _____	 4 <u>0</u> 8 _____	 <u>3</u> 21 _____	 9 <u>7</u> 2 _____

____ I double checked my work.