

Name: _____


Place Value Expanded Notation

 Directions: Write the number in expanded notation.

1.



2.



3.




4.



5.




6.



7.



8.



_____ I double checked my work.