

Name: _____

CCSS 2.NBT.5 Fluently add and subtract within 100.....

Addition With Regrouping

~~6~~ Directions: Solve the problems. Color the pumpkin with the matching sum.

$$\begin{array}{r} 67 \\ + 17 \\ \hline \end{array}$$

$$\begin{array}{r} 55 \\ + 37 \\ \hline \end{array}$$

$$\begin{array}{r} 44 \\ + 28 \\ \hline \end{array}$$

$$\begin{array}{r} 31 \\ + 39 \\ \hline \end{array}$$

$$\begin{array}{r} 56 \\ + 26 \\ \hline \end{array}$$











$$\begin{array}{r} 65 \\ + 18 \\ \hline \end{array}$$

$$\begin{array}{r} 24 \\ + 29 \\ \hline \end{array}$$

$$\begin{array}{r} 21 \\ + 19 \\ \hline \end{array}$$

$$\begin{array}{r} 13 \\ + 28 \\ \hline \end{array}$$

$$\begin{array}{r} 26 \\ + 45 \\ \hline \end{array}$$



____ I double checked my work.

Graphics/fonts copyright DJ Inkers. www.djinkers.com