

Name: \_\_\_\_\_

Week 8 Day 1

Complete the number sentence.

$$\begin{array}{r} 27 \\ +47 \\ \hline \end{array} \qquad \begin{array}{r} 40 \\ +54 \\ \hline \end{array}$$

Is 18 even or odd?

○ ○ ○ ○ ○ ○ ○ ○ ○ ○  
-----  
○ ○ ○ ○ ○ ○ ○ ○ ○ ○

\_\_\_\_\_

What is 10 less than?

78 \_\_\_\_\_

32 \_\_\_\_\_


46 \_\_\_\_\_

Use the commutative property to complete the number sentence.

$$7 + 9 = \_ + 7$$

$$4 + 8 = 8 + \_$$

Write the time.



\_\_\_\_\_ : \_\_\_\_\_

Add

$$6 + 3 + 6 + 2 = \underline{\hspace{2cm}}$$

$$4 + 7 + 3 + 5 = \underline{\hspace{2cm}}$$

Week 8 Day 2

Skip count by 10 starting with 74.

74, \_\_\_\_\_, \_\_\_\_\_, \_\_\_\_\_, \_\_\_\_\_

Circle the greatest number.


- a) 500 + 70
- b) 500 + 9
- c) 500 + 20 + 6
- d) 90 + 5

Write the number in standard form.

$$600 + 3$$

\_\_\_\_\_

Write the time.



\_\_\_\_\_ : \_\_\_\_\_

Name: \_\_\_\_\_

## Week 8 Day 3

Complete the number sentence.

$___ + 7 = 15$

$3 + ___ = 12$

$18 - ___ = 6$

$___ - 5 = 7$

How much money?



What is the biggest number you can make with the numbers below?

3      7      2

\_\_\_\_\_

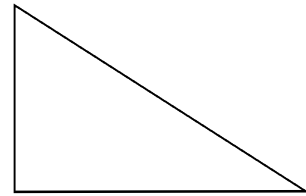
Circle the group of numbers that are from least to greatest.

a) 125, 452, 351, 748

b) 125, 351, 452, 748

c) 351, 748, 452, 125

How many sides and vertices?



\_\_\_\_\_ sides      \_\_\_\_\_ vertices

Complete the number sentence.

$___ + 7 = 11$

$6 + ___ = 14$

$17 - ___ = 8$

$___ - 5 = 8$

## Week 8 Day 4

Skip count by 5 starting with 90.

90, \_\_\_\_\_, \_\_\_\_\_, \_\_\_\_\_, \_\_\_\_\_, \_\_\_\_\_

How many hundreds, tens and ones?

278

\_\_\_\_\_ hundreds

\_\_\_\_\_ tens


\_\_\_\_\_ ones

Write the number in expanded form.

608

\_\_\_\_\_

Partition (divide) the circle into 4 equal parts.



Name: \_\_\_\_\_

**Week 8 Day 5**

Complete the number sentence.

$$\begin{array}{r} 33 \\ +27 \\ \hline \end{array}$$

$$\begin{array}{r} 28 \\ +54 \\ \hline \end{array}$$

Write the numbers in order from least to greatest.

248, 486, 126, 94

\_\_\_\_\_ , \_\_\_\_\_ , \_\_\_\_\_ , \_\_\_\_\_

Write the value of the underlined digit.

782 \_\_\_\_\_

782 \_\_\_\_\_

782 \_\_\_\_\_

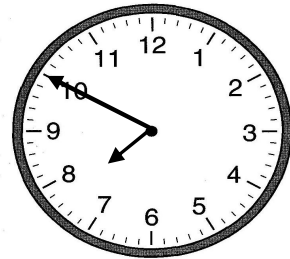
Write the number in word form.

111

\_\_\_\_\_

\_\_\_\_\_

Write the time.



\_\_\_\_\_ : \_\_\_\_\_

**Week 8 WP**

Pakey is 52 inches tall. His teddy bear is 14 inches tall. How much taller is Pakey than his teddy bear?

\_\_\_\_\_